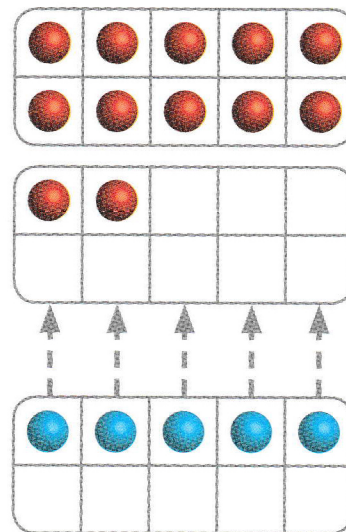



J'observe

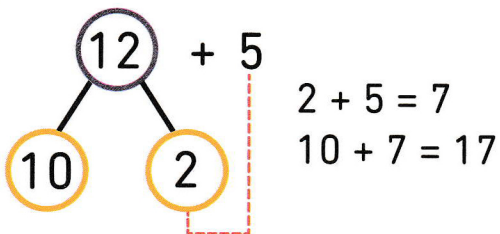
Additionne 12 et 5.

Décompose d'abord 12 en 10 et 2 puis additionne 2 et 5.



12

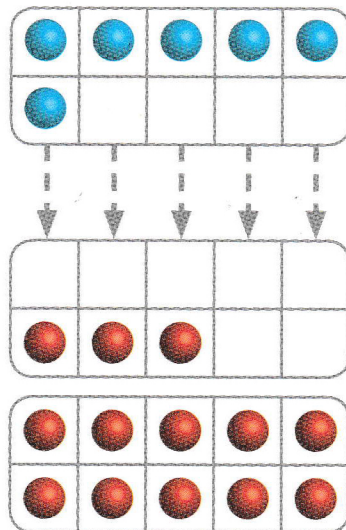
5



$$12 + 5 = 17$$

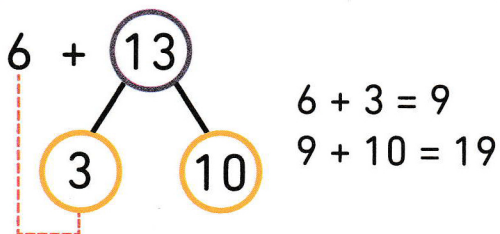

Additionne 6 et 13.

13, c'est 10 et 3.



6

13



$$6 + 13 = 19$$